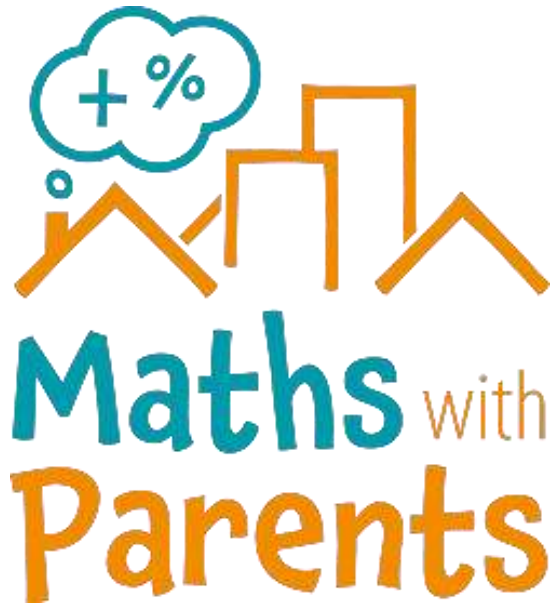


Maths

Tuesday 30th June

Maths with Parents



<https://mathswithparents.com/>

Please contact your child's teacher
if you do not have their login details.

Times Tables Rock Stars

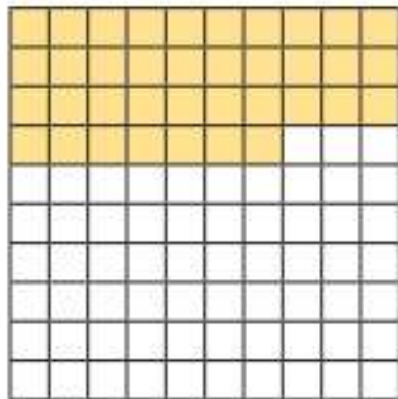


<https://ttrockstars.com/>

L.O. To use bonds to 100 (from yesterday)

Bonds to 100 (tens and ones)

1 Here is a hundred square.

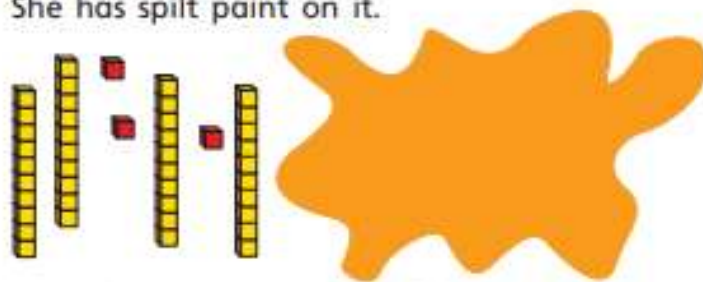


How many squares are shaded?

How many squares are not shaded?

$$\square + \square = 100$$

2 Eva has made 100 using base 10. She has spilt paint on it.



Draw the missing pieces of base 10


3 Mrs Harris has these apples for Sports Day.



She needs 100 apples.

How many more apples does Mrs Harris need?

- 4 Complete the bar model.



- 5 Complete the calculations.

a) $40 + \square = 100$ e) $100 - 50 = \square$

b) $\square + 70 = 100$ f) $100 - 37 = \square$

c) $100 = \square + 72$ g) $\square = 100 - 22$

- 6 A coat costs £100
Mr Farmer has £58
How much more money does Mr Farmer need to buy the coat?

- 7 Whitney is working out $38 + \square = 100$



The missing number is 72 because I need 2 more ones and 7 more tens.

Do you agree with Whitney? _____
Explain your answer