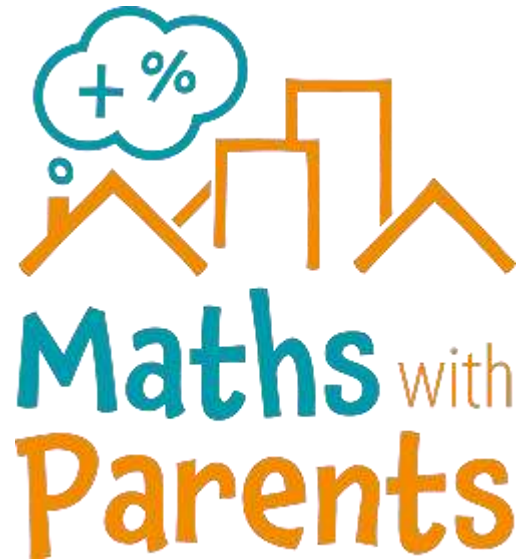


MATHS

Thursday 25th June

Maths with Parents



<https://mathswithparents.com/>

Please contact your child's teacher
if you do not have their login details.

Times Tables Rock Stars




<https://trockstars.com/>

Add 2-digit numbers (2)

LI: To recap adding 1 and 2-digit numbers (from yesterday)

1 Count the ones and complete the sentences.



ones = ten



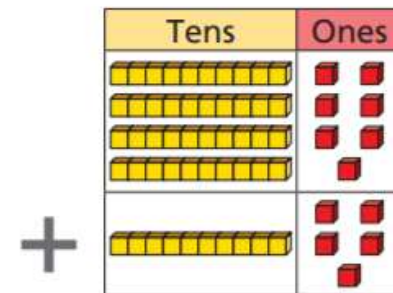
ones = ten and ones



ones = ten and ones



2 Complete the additions.



ones + ones = ones

ones = ten + ones

tens + tens = tens

+ =

3 Use base 10 to complete the additions.

a) $7 + 4 =$

f) $37 + 14 =$

b) $10 + 30 =$

g) $22 + 19 =$

c) $17 + 34 =$

h) $48 + 19 =$

d) $19 + 21 =$

i) $33 + 29 =$

e) $18 + 64 =$

j) $39 + 47 =$

4 Fill in the missing digits to complete the number sentence.

$$_9 + _3 = 62$$

Compare answers with a partner.

How many different answers can you find?