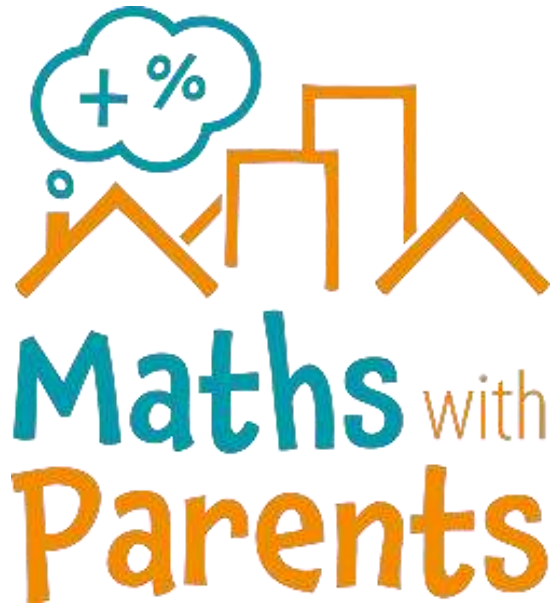


MATHS

Tuesday 23rd June

Maths with Parents



<https://mathswithparents.com/>

Please contact your child's teacher if you do not have their login details.

Times Tables Rock Stars



<https://ttrockstars.com/>

Add and subtract 10s

LI: To recap addition and subtraction of 10s (from yesterday)

- 1 a) Eva has some marbles.



How many marbles does Eva have?

Eva has marbles.

She buys 3 more boxes of marbles.

How many marbles does she have now?

- b) Teddy has some marbles.



How many marbles does Teddy have?

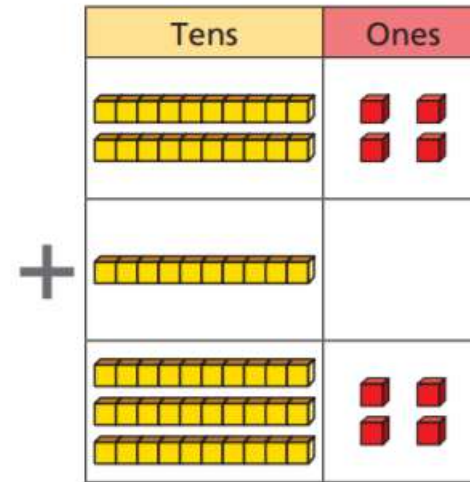
Teddy has marbles.

He gives 5 boxes of marbles to his friend.

How many marbles does he have now?

- 2 What calculation is represented?

Complete the number sentence.



+

$$\square + \square = \square$$

	T	O
	2	4
+	1	0
	3	4

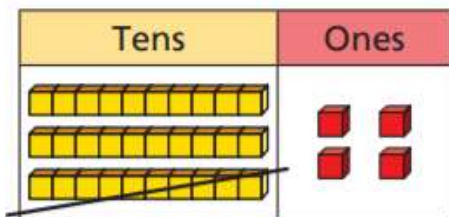
- 3 Use base 10 to complete the calculations.

a) $24 + 20 = \square$

b) $17 + 50 = \square$

c) $40 + 16 = \square$

- 4 What calculation is represented?
Complete the number sentence.



		T	O	
		3	4	
	-	1	0	
		2	4	

$$\square - \square = \square$$

- 5 Use base 10 to complete the calculations.

a) $34 - 20 = \square$

b) $57 - 20 = \square$

c) $46 - 40 = \square$



- 6 Huan has 6 stickers.




He gets 10 new stickers every day for 8 days.

How many stickers will Huan have after 8 days?



Use the number track to help you.



Huan will have stickers.

- 7  = 30  = 10  = 40

Complete the calculations.

a)  +  =

b)  -  =

c)  -  =