

Monday

Today we are learning to compare numbers.

Your star words are:

tens

ones

total

altogether

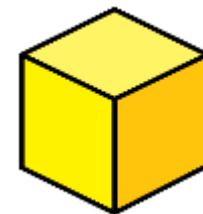
more

greater

less

Warm your maths' brain up with these quick-fire questions.


Name the 3D shape and describe the properties.



1) Complete the sentence using **above** or **below**.



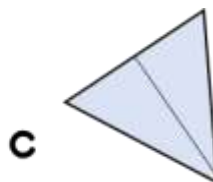
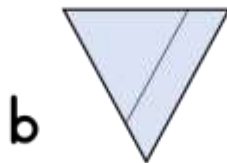
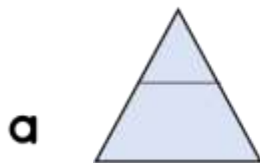
The  is _____ the 



2) The domino has turned a _____ turn.



3) Which shape is split in half?



4) What is seven add zero?

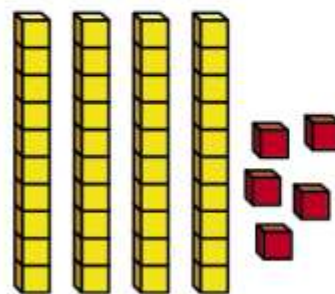
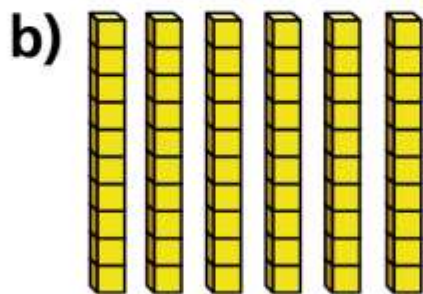
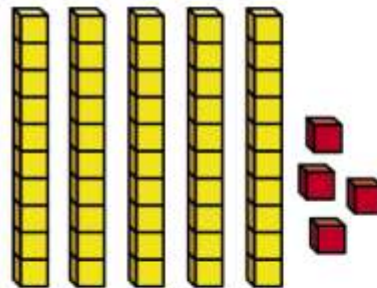
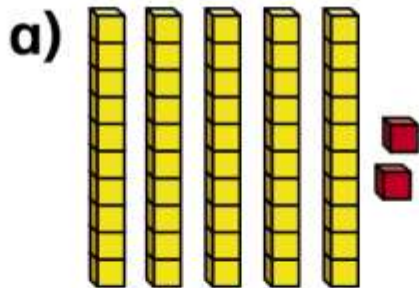
Today we are comparing numbers by looking at tens and ones.

Comparing numbers (1)

To see a video about comparing numbers using tens and ones, follow this link:
<https://vimeo.com/430320026>

I Which is the greater number in each pair?

Tick your answers.

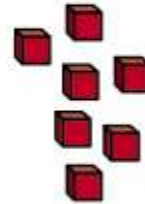
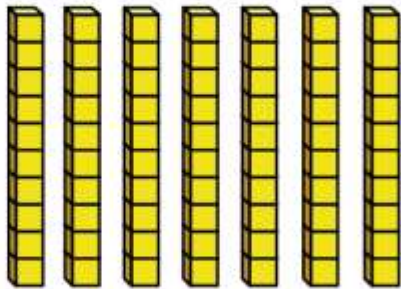


Can you count in tens and then on in ones?





c)



How do you know?

Use your star words to explain how you know.



Count in tens and then on in ones.

If you have marbles or other small objects at home, can you count them by grouping in tens and then on in ones?

2 Mo and Kim each have some marbles.



a) How many marbles does Mo have?

2



Kim



b) How many marbles does Kim have?

c) Who has more marbles? _____

How do you know?

Use your star words to explain how you know.



Use pasta or small objects to make groups of 10. Spaghetti sticks work well to make tens and you can break up one stick into 10 ones!

3 Use base 10

a) Make a number greater than 50

What number did you make?

b) Make a number less than 90

What number did you make?

c) Make a number greater than 80
but less than 100

What number did you make?

Talk about your answers.



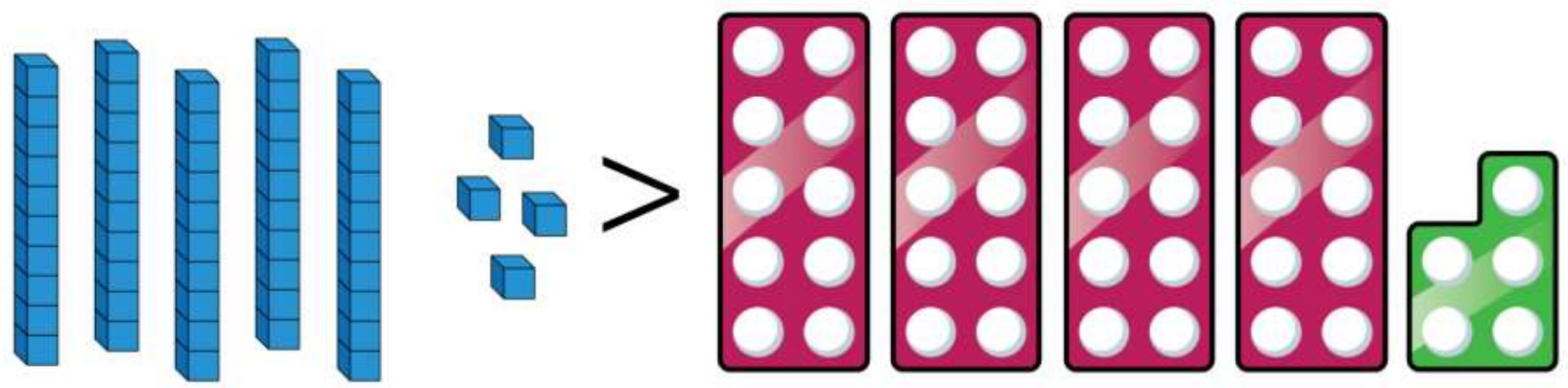
4 Write **greater than** or **less than** to complete the sentences.

a) 72 is _____ 83

b) 100 is _____ 99

c) 65 is _____ 56

True or False ?




Is this true or false?

Can you convince me? Use your maths' reasoning and vocabulary to justify your answer.

Look at the next slide to check your answer.

True



54 is more than 45

There are 5 tens in 54 but only 4 tens in 45

Challenge

Look at the grid. Choose a number and complete the second grid.

		50	
Count in 1s	49	50	51
Count in 10s	40	50	60

		?	
Count in 1s			
Count in 10s			