

Wednesday

Today we are learning to order numbers.


Your star words are:

smallest

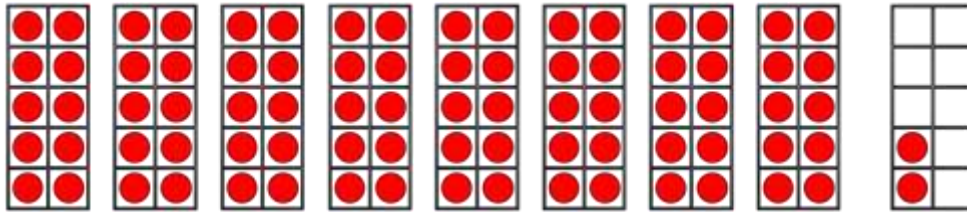
greatest

Warm your maths' brain up with these quick-fire questions.


Name the 3D shape and describe the properties.



1) What number is shown?



2) The domino has turned a _____ turn.



3) Half of 12 is _____



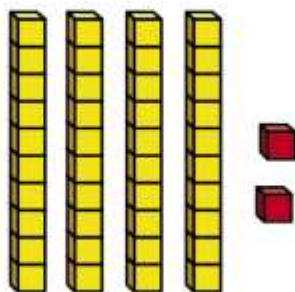
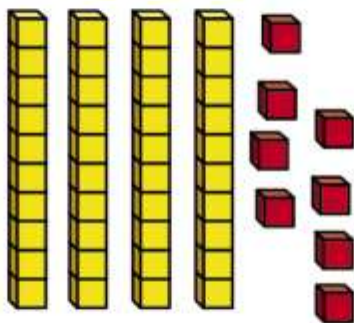
4) What is double 10?

Today we are ordering numbers by looking at tens and ones.

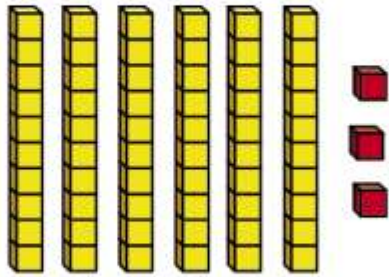
Ordering numbers

To see a video ordering numbers, follow this link: <https://vimeo.com/430313386>

I a) What numbers are shown?



Count in tens and then count on in ones



b) Write the numbers in order.
Start with the smallest.



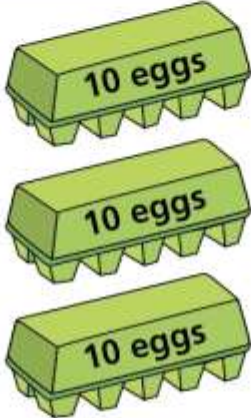

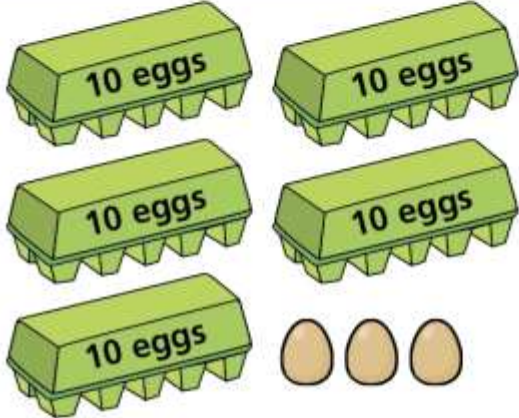
smallest



greatest

How do you know? Use your star words.

2 Three hens lay these eggs.

Hen 1	Hen 2	Hen 3
		

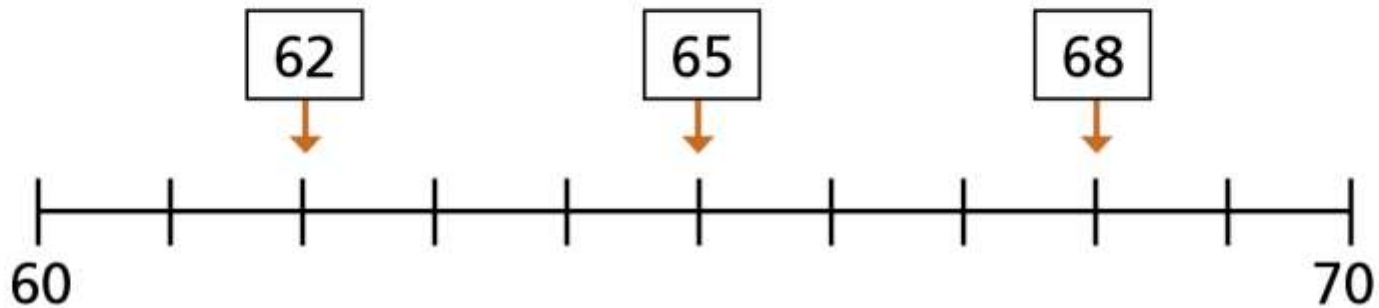
Put the number of eggs in order.
Start with the greatest number.

greatest

smallest

Count in tens and then count on in ones

- 3 Three numbers are labelled on a number line.



Write the numbers in order.

Start with the smallest number.

smallest

greatest

How do you know? Use your star words. Remember to use complete sentences.

- 4** Put the numbers in order.
Start with the smallest number.

a) 53, 58, 47

<input type="text"/>	,	<input type="text"/>	,	<input type="text"/>
----------------------	---	----------------------	---	----------------------

b) 19, 83, 7

<input type="text"/>	,	<input type="text"/>	,	<input type="text"/>
----------------------	---	----------------------	---	----------------------

How do you know? Use your star words. Remember to use complete sentences.

5 Tick all the numbers between 80 and 100

72

95

11

85

9

What does between mean?

How did you work it out? Can you convince me you are correct? Use your star words. Remember to use complete sentences.

45 76 67

smallest \longrightarrow largest

The numbers have been ordered
from smallest to largest.

Is this true or false?

Can you convince me? Use your maths' reasoning and vocabulary to justify your answer.
Look at the next slide to check your answer.

False

76 is more than 67

The correct order is

45 67 76

smallest \longrightarrow largest

Challenge

What's the same? What's different?

45	54
----	----

If Sam places these 5 numbers in order, starting with the smallest number, which number will be in fourth position?

46	64	24	42	50
<input type="text"/>	<input type="text"/>	<input type="text"/>	<input type="text"/>	<input type="text"/>
smallest				largest