


# MATHS


Monday 13<sup>th</sup> July

LI: To make equal groups by sharing

Ron is playing with three friends, he is sharing out fruit.



Ron is playing with three friends, he is sharing out fruit.



There are 8 bananas. There are  children.  
Each child gets  bananas.

There are 5 children in a group.

Have a go

Can they share 8 bananas equally?



There are 5 children in a group.

Can they share 8 bananas equally?



There are 5 children in a group.

Can they share 8 bananas equally?

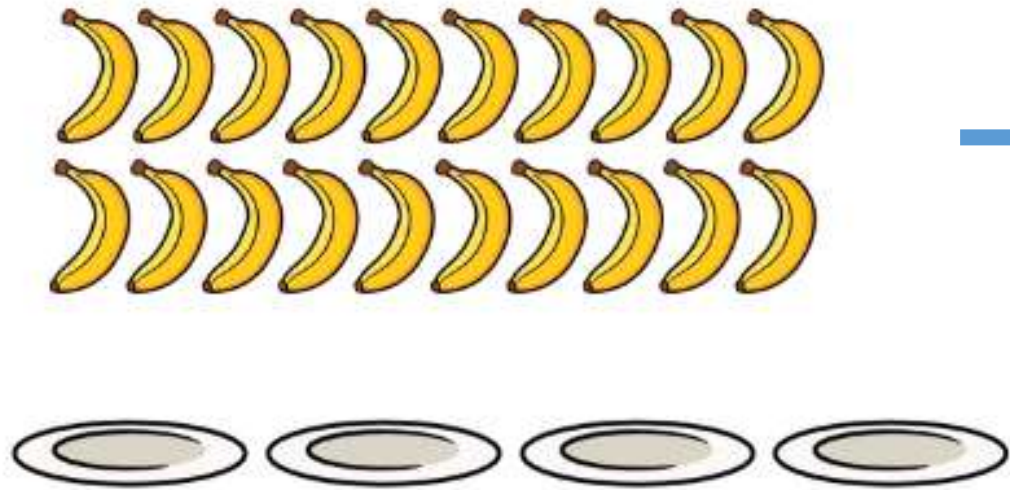


Can they share 10 bananas equally?

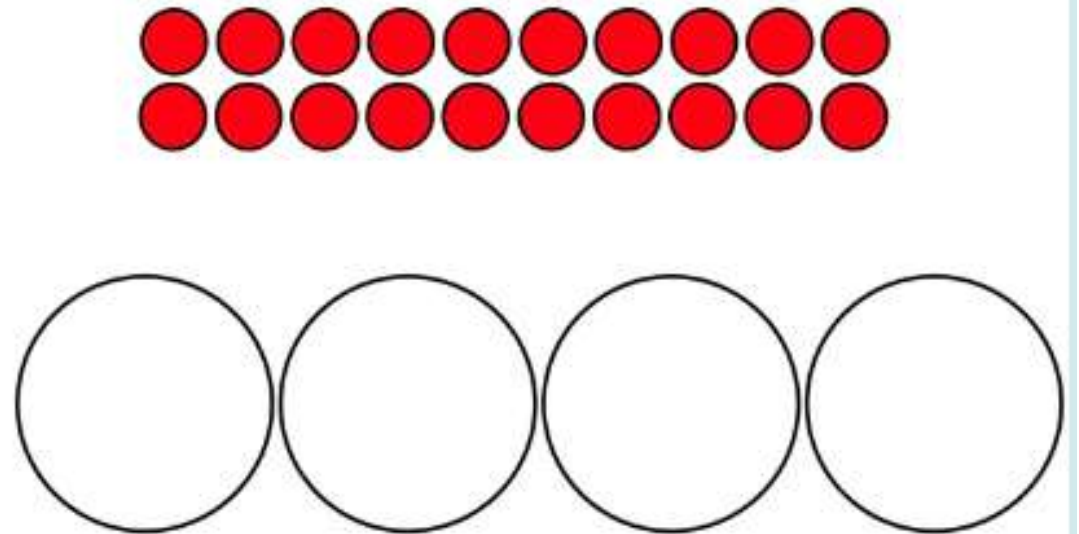
Each child gets  bananas.



Teddy has 20 bananas.  
He wants to share them equally between 4 people.  
How many bananas does each person get?



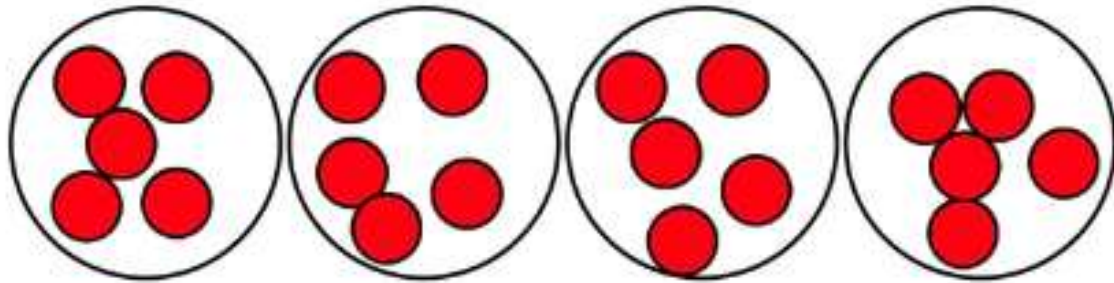
Teddy has 20 bananas.  
He wants to share them equally between 4 people.  
How many bananas does each person get?



Teddy has 20 bananas.

He wants to share them equally between 4 people.

How many bananas does each person get? **5**



Whitney has 16 flowers.



She shares them equally between some vases.

How many flowers would there be in each if she had...

- a) 2 vases
- b) 4 vases
- c) 8 vases
- d) 16 vases
- e) 1 vase

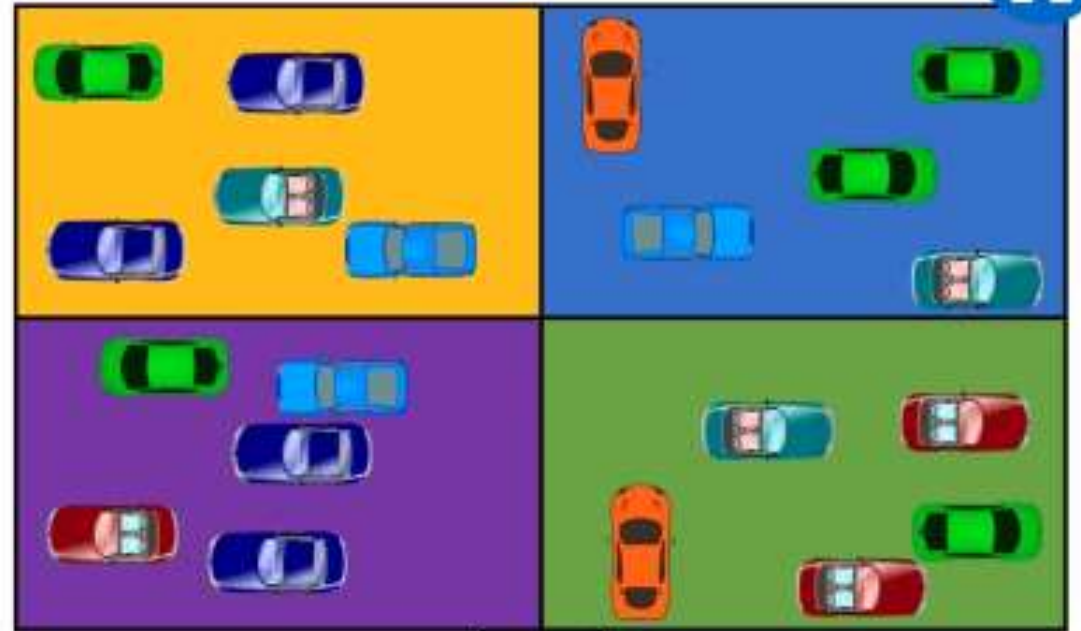
Whitney has 16 flowers.



She shares them equally between some vases.  
How many flowers would there be in each if she had...

- a) 2 vases      8 flowers in each vase
- b) 4 vases      4 flowers in each vase
- c) 8 vases      2 flowers in each vase
- d) 16 vases     1 flower in each vase
- e) 1 vase        16 flowers in the vase

Twenty cars drive into a car park.      Have a go

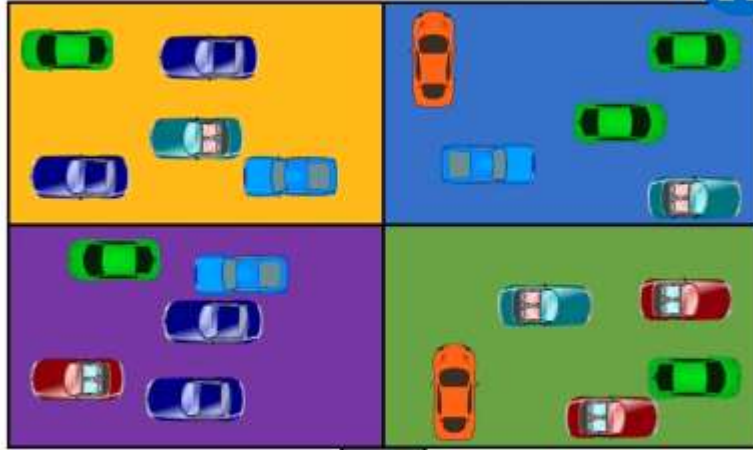


$$\square + \square = \square$$

Answer:

Twenty cars drive into a car park.

Have a go



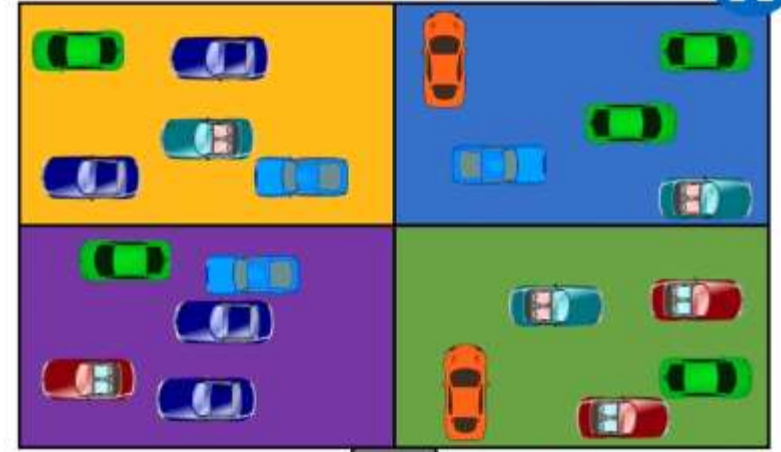
$$20 \div 4 = 5$$



We started with 20 cars and shared them into 4 spaces. There are 5 cars in each space.

Twenty cars drive into a car park.

Have a go



$$20 \div 4 = 5$$

$$20 \div 5 = 4$$



Although we started with 20 cars, there are NOT 5 spaces. There are also NOT 4 cars in each space.

★	20 ÷ 10	30 ÷ 10	50 ÷ 10	70 ÷ 10	80 ÷ 10
★★	12 ÷ 2	8 ÷ 2	20 ÷ 2	16 ÷ 2	4 ÷ 2
★ ★★	20 ÷ 5	35 ÷ 5	15 ÷ 5	60 ÷ 5	40 ÷ 5
	12 ÷ 2	8 ÷ 2	20 ÷ 2	16 ÷ 2	4 ÷ 2
	20 ÷ 5	35 ÷ 5	15 ÷ 5	60 ÷ 5	40 ÷ 5
	21 ÷ 3	36 ÷ 3	9 ÷ 3	18 ÷ 3	27 ÷ 3