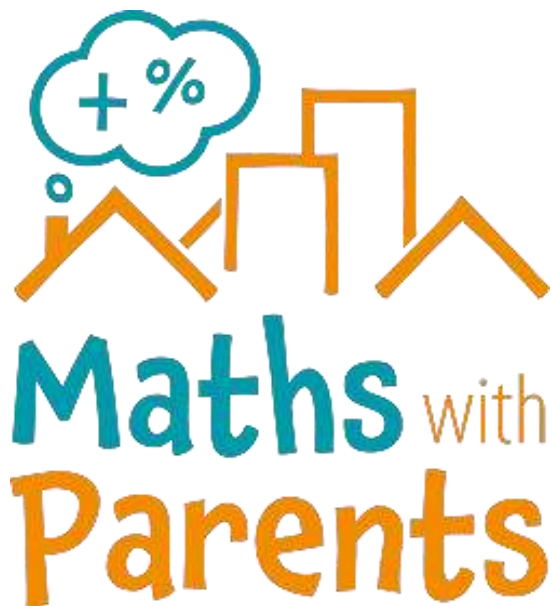


MATHS

Thursday 16th July

LI: To recap making equal groups by grouping

Maths with Parents



<https://mathswithparents.com/>

Please contact your child's teacher
if you do not have their login details.


Times Tables Rock Stars



<https://ttrockstars.com/>

Make equal groups – grouping

1 Annie has 10 apples.



Annie has some plates.

She wants to put 2 apples on each plate.

Show how Annie groups the apples.



Complete the sentences.

There are apples.

There are apples on each plate.

There are plates.



2 Take 15 counters.



Put the counters into groups of 3

Complete the sentences.

There are 15 counters.

The counters are in groups of

There are groups.

3 Mo has 20 chairs.

a) Circle groups of 5 chairs.



b) How many groups did you circle?

c) Complete the number sentence.

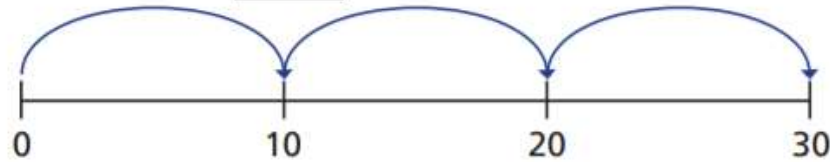
$$\boxed{} \div \boxed{} = \boxed{}$$



4 Complete the number sentences.

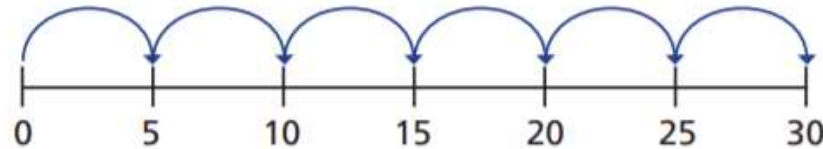
Use the number line to help you.

a) $30 \div 10 = \square$



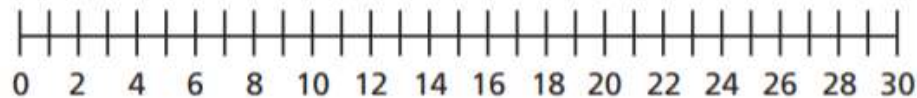
30 is made of \square equal groups of \square

b) $30 \div 5 = \square$



30 is made of \square equal groups of \square

c) Investigate other equal groups you could make with 30



Talk about it with a partner.

5 Eva is putting 24 pencils into pots.



She puts 2 pencils into each pot.
How many pots does Eva need?

$$\square \div \square = \square$$

Eva needs \square pots.

6

With 40 counters
you can only make equal
groups of 4 and 10



Is Ron correct? _____

Use counters to show how you know.

