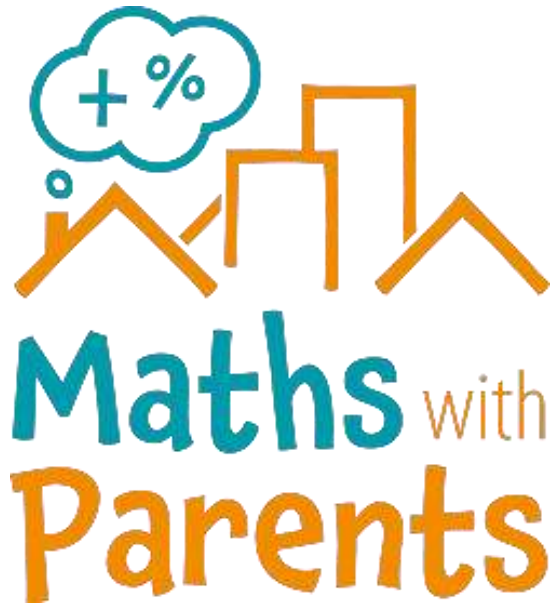


Maths

Thursday 9<sup>th</sup> July

## Maths with Parents



<https://mathswithparents.com/>

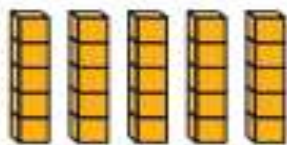
Please contact your child's teacher  
if you do not have their login details.

## Times Tables Rock Stars




<https://ttrockstars.com/>

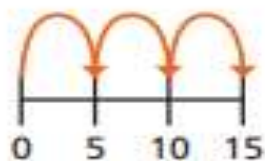
1 a) Match the picture to the times-table fact.



$3 \times 5$



$2 \times 5$



$1 \times 5$

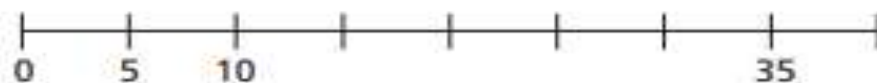


$5 \times 5$

b) Draw a picture to show  $4 \times 5$



2 a) Complete the number line.



b) Which times-table does the number line show?

Tick your answer.

1 times-table

2 times-table

5 times-table

How do you know?



3 Complete the number sentences.

a)  $5 \times 5 = \square$

f)  $\square = 11 \times 5$

b)  $\square = 9 \times 5$

g)  $5 \times \square = 5$

c)  $5 \times 6 = \square$

h)  $5 \times 0 = \square$

d)  $5 \times \square = 40$

i)  $10 = 5 \times \square$

e)  $35 = \square \times 5$

j)  $\square \times 5 = 60$

4 How much money does Ron have?



Complete the multiplication.

$$\square \times \square = \square$$

Ron has  $\square$  p.

5 Write  $<$ ,  $>$  or  $=$  to compare the calculations.

$7 \times 5$



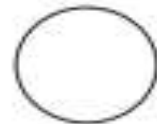
$5 \times 8$

$6 \times 5$




$4 \times 5 + 2 \times 5$

$2 \times 5$



$3 \times 5 - 1 \times 5$

$12 \times 2$



$2 \times 12$

6 A sandwich costs £2 and a box of crayons costs £5



Jack buys 5 sandwiches and 3 boxes of crayons.  
How much does he spend in total?

Jack spends £